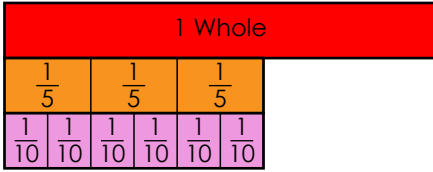


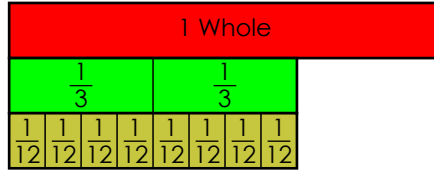
Name: \_\_\_\_\_

# Fractions

Fill in the missing numerator from each fraction.



$$\frac{3}{5} = \frac{\quad}{10}$$

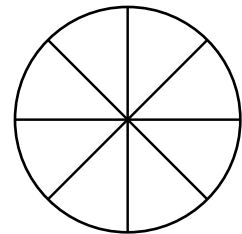
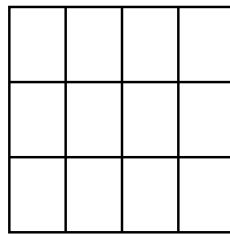
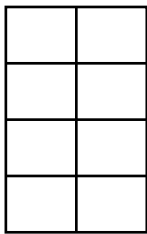


$$\frac{2}{3} = \frac{\quad}{12}$$

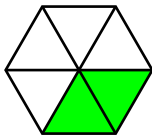


$$\frac{1}{4} = \frac{\quad}{8}$$

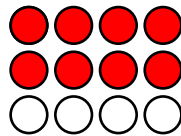
Color  $\frac{3}{4}$  of each shape.



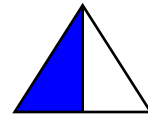
Write three equivalent fractions for the shaded portion of each illustration.



\_\_\_\_\_ = \_\_\_\_\_ = \_\_\_\_\_



\_\_\_\_\_ = \_\_\_\_\_ = \_\_\_\_\_



\_\_\_\_\_ = \_\_\_\_\_ = \_\_\_\_\_

Circle the fractions that are in simplest form. Write the simplest form of each fraction that can be simplified.

$$\frac{1}{4}$$

$$\frac{6}{8}$$

$$\frac{6}{12}$$

$$\frac{2}{3}$$

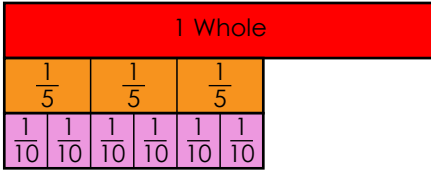
$$\frac{4}{10}$$

$$\frac{5}{8}$$

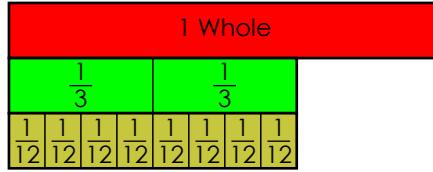
# ANSWER KEY

## Fractions

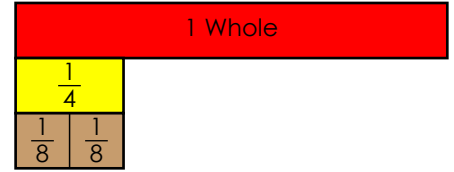
Fill in the missing numerator from each fraction.



$$\frac{3}{5} = \frac{6}{10}$$

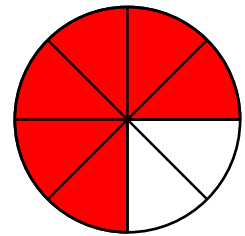
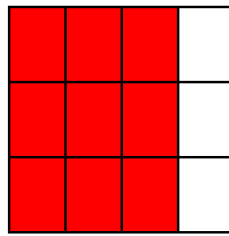



$$\frac{2}{3} = \frac{8}{12}$$

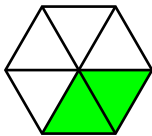


$$\frac{1}{4} = \frac{2}{8}$$

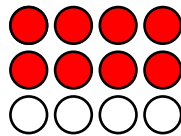
Color  $\frac{3}{4}$  of each shape.



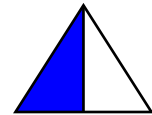
Write three equivalent fractions for the shaded portion of each illustration.



$$\frac{1}{3} = \frac{2}{6} = \frac{4}{12}$$



$$\frac{2}{3} = \frac{4}{6} = \frac{3}{9}$$



$$\frac{1}{3} = \frac{2}{6} = \frac{4}{12}$$

Circle the fractions that are in simplest form. Write the simplest form of each fraction that can be simplified.

$$\frac{1}{4}$$

$$\frac{6}{8} \quad \frac{3}{4}$$

$$\frac{6}{12} \quad \frac{1}{2}$$

$$\frac{2}{3}$$

$$\frac{4}{10} \quad \frac{2}{5}$$

$$\frac{5}{8}$$