



Ancient World History Guild

Mastering Ancient World History

SOL#: WH1.2

Topic: Paleolithic Era to Agricultural Revolution

Apprentice Level	Journeyman Level
<p>Part I: Define the following words</p> <ol style="list-style-type: none"> 1. Paleolithic - _____ 2. Neolithic - _____ 3. Hominid - _____ 4. Prehistory - _____ 5. Artifact - _____ <p>Part II: Choose the correct word that completes each sentence.</p> <ol style="list-style-type: none"> 1. The way of life of a society is its (<i>technology/culture</i>). 2. (<i>Mary Leakey/Donald Johanson</i>) gave the name Lucy to an australopithecine. 3. The <i>Paleolithic Period/Neolithic Period</i> lasted from at least 2 million BCE to about 10,000 BCE. 4. (<i>Çatalhüyük/Jericho</i>) was a tiny Neolithic village located in present-day Turkey. 5. A highly organized social order is a (<i>culture/civilization</i>). 6. A group of states or territories controlled by one ruler is a(n) (<i>empire/city-state</i>). 	<p>Part I: Fill-in-the-blank with the correct term.</p> <ol style="list-style-type: none"> 1. _____ are scientists who study the culture of early humans. 2. _____ are scientists who study past cultures through their material remains. 3. _____ - _____ helps scientists to determine the age of artifacts/fossils. 4. The 3 types of early hominid groups include _____ _____, & _____. <p>Part II: Identify the following.</p> <div style="display: flex; justify-content: space-around; align-items: flex-start;">   </div>

Master Level

Part I: List the 6 characteristics of Paleolithic societies.

-
-
-
-
-
-

Part II: List the 5 characteristics of Neolithic societies.

-
-
-
-
-

Part III: Answer the following questions.

1. Homo sapiens in Africa, between 100,000 and 400,000 years ago,

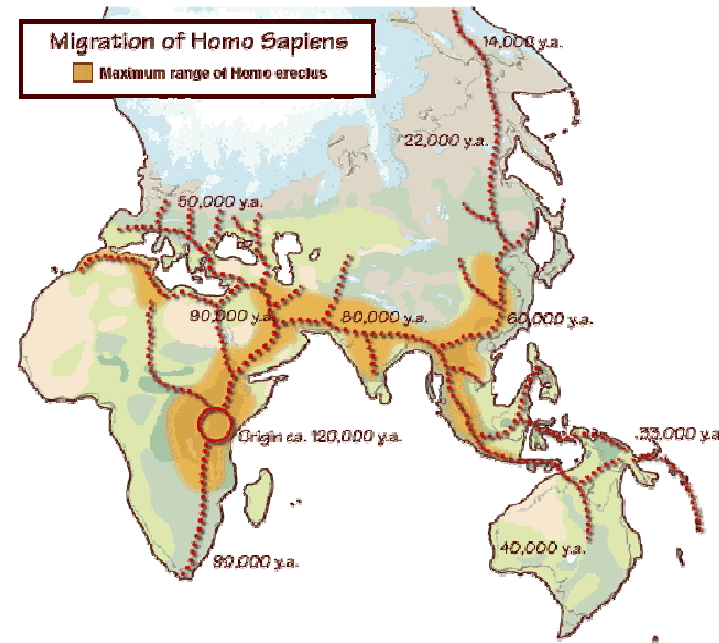
- A lived in semi-permanent settlements.
- B had an organized government.
- C had complex tools.
- D were nomadic.

2. Neolithic societies

- A were disorganized.
- B relocated frequently in search of food.
- C had simple tools.
- D were also referred to as New Stone Age.

3. Scientists that study past cultures by analyzing human remains, fossils, and artifacts are called

- A Paleontologists.
- B Archaeologists.
- C Psychologists.
- D Entomologists.



1. According to this map, what is the **relative location** of human origins?
2. Which was the **first** hominid to migrate from Africa?
3. To which continent did hominids migrate first?
4. Why was migration to the north a slow process?