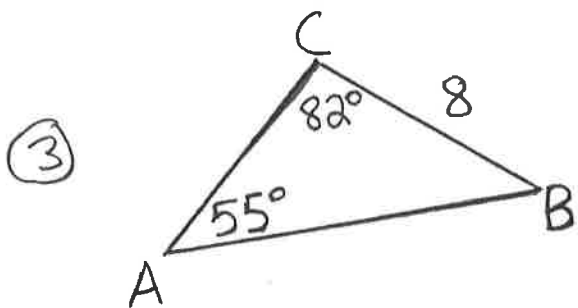
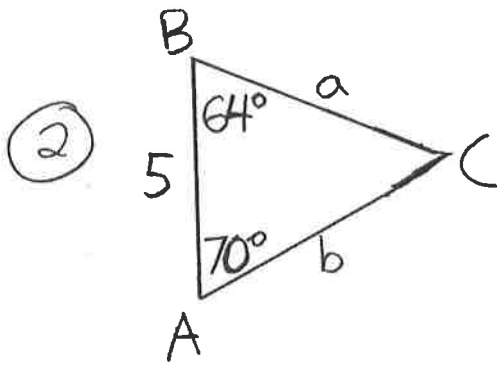
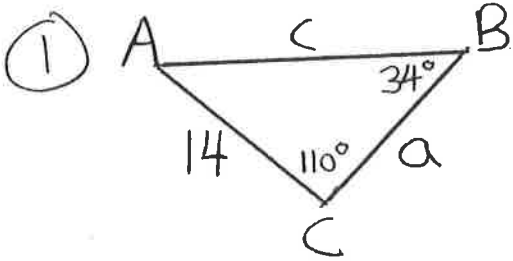
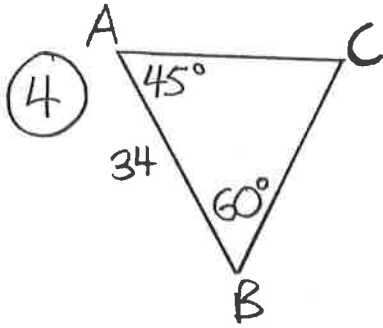


Algebra II / Trig  
1/12 HW

Name \_\_\_\_\_

Solve  $\triangle ABC$





⑤  $C = 103^\circ$   $B = 28^\circ$   $b = 26$  feet

⑥  $B = 118^\circ$   $C = 36^\circ$   $c = 14$  inches