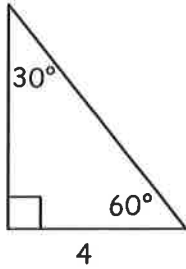


# Assignment B

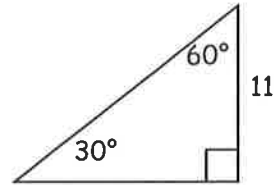
## Geometry/Trig 8-4 PRACTICE PROBLEMS

Solve for the missing sides. Be sure to keep answers in radical form.

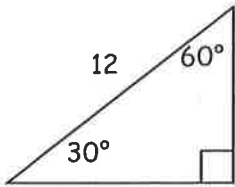
1)



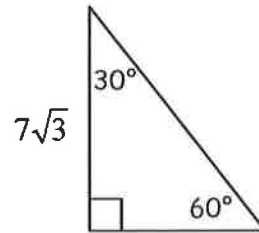
2)



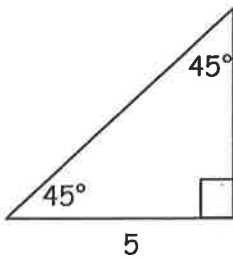
3)



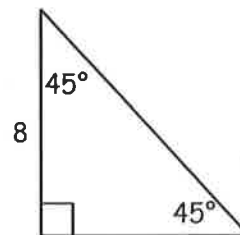
4)



5)

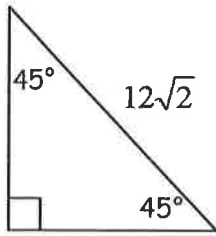


6)

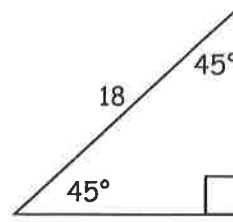


Geometry/Trig  
8-4 PRACTICE PROBLEMS

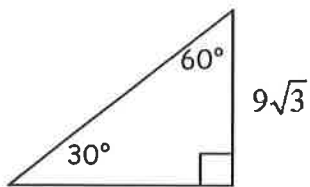
7)



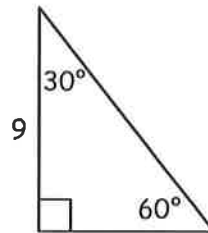
8)



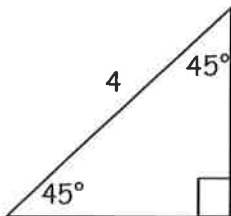
9)



10)



11)



12)

