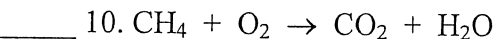
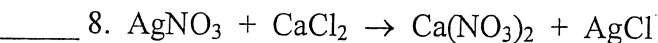
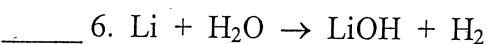
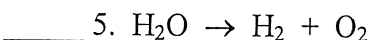


Name: _____ Date: _____ Period: _____

Identify the type of equation as Double Displacement (DD), Single Displacement (SD), Synthesis (S), or Decomposition (D). Make sure to balance all equations.



Name: _____ Date: _____ Period: _____

Identify the type of equation as Double Displacement (DD), Single Displacement (SD), Synthesis (S), or Decomposition (D). Make sure to balance all equations.

