

KEY

Precalculus Spiral

Final exam preparation questions

Algebra

Graphing

Exponential

Trigonometry

Stat/probability

Functions: find $f(2)$ and $f(-3)$

- 1.) $f(x) = -3x^3 + 4x^2 + 10x - 7$ $f(2) = 5$ $f(-3) = 80$
- 2.) $g(x) = 2x^4 - 5x^3 - 6x^2 + 7$ $f(2) = -25$ $f(-3) = 250$
- 3.) $h(x) = 6x^3 - 3x^2 - 8x - 2$ $f(2) = 18$ $f(-3) = -167$

Composition: find $f(g(x))$

- 1.) $f(x) = 3x + 2$ $g(x) = 5x - 2$ $f(g(x)) = 15x - 4$
- 2.) $f(x) = x^2 - 5$ $g(x) = 3x - 4$ $f(g(x)) = 9x^2 - 24x + 11$
- 3.) $f(x) = x^2 - 4x + 2$ $g(x) = x + 2$ $f(g(x)) = x^2 - 2$

Operations: Subtract and multiply

- 1.) $f(x) = 2x - 4$ $g(x) = 3x - 5$
- 2.) $f(x) = x^2 + 4$ $g(x) = 3x - 1$
- 3.) $f(x) = 5x + 2$ $g(x) = x^2 - 3$

$$\textcircled{1} (f-g)(x) = -x+1 \quad (f \cdot g)(x) = 6x^2 - 22x + 20$$

$$\textcircled{2} (f-g)(x) = x^2 - 3x + 5 \quad (f \cdot g)(x) = 3x^3 - x^2 + 12x - 4$$

$$\textcircled{3} (f-g)(x) = -x^2 + 5x + 5 \quad (f \cdot g)(x) = 5x^3 + 2x^2 - 15x - 6$$

$$Y = mx + b$$

- 1.) $(-3, 2), (-4, 1)$ $y = x + 5$
- 2.) $(5, -2), (2, 4)$ $y = -2x$
- 3.) $(-3, 4), (2, 4)$ $y = 4$

Inverse: find f^{-1}

- 1.) $f(x) = -3x + 2$
- 2.) $g(x) = x^3 - 5$
- 3.) $h(x) = \frac{2x+4}{5}$

$$\textcircled{1} \quad y = -3x + 2$$

$$x = -3y + 2$$

$$x - 2 = -3y$$

$$y = \frac{x-2}{-3}$$

$$f^{-1}(x) = \frac{x-2}{-3}$$

$$\textcircled{2} \quad y = x^3 - 5$$

$$x = y^3 - 5$$

$$x + 5 = y^3$$

$$y = \sqrt[3]{x+5}$$

$$f^{-1}(x) = \sqrt[3]{x+5}$$

$$\textcircled{3} \quad y = \frac{2x+4}{5}$$

$$x = \frac{2y+4}{5}$$

$$5x = 2y + 4$$

$$5x - 4 = 2y$$

$$\frac{5x-4}{2} = y$$

$$f^{-1}(x) = \frac{5x-4}{2}$$

Synthetic Division: divide

- 1.) $(3x^3 - 7x^2 + 4x - 2) \div (x - 2)$
- 2.) $(2x^3 - 3x^2 + 3x - 5) \div (x + 2)$
- 3.) $(3x^3 - 4x^2 - 5x + 2) \div (x - 4)$

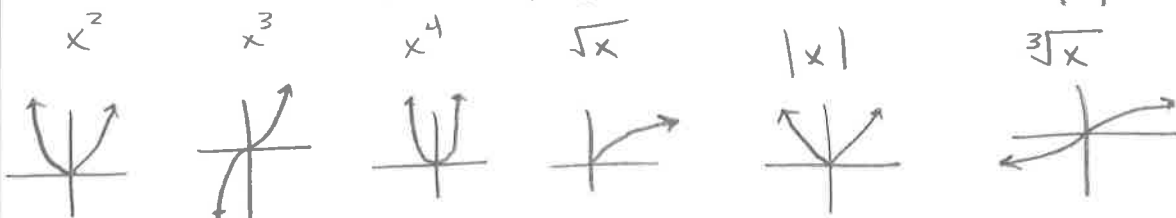
$$\textcircled{1} \quad 2 \begin{array}{r|rrrr} 3 & -7 & 4 & -2 \\ \downarrow & 6 & -2 & 4 \\ \hline 3 & -1 & 2 & 2 \end{array} \quad \boxed{3x^2 - x + 2 + \frac{2}{x-2}}$$

$$\textcircled{2} \quad -2 \begin{array}{r|rrrrr} 2 & 0 & -3 & 3 & -5 \\ \downarrow & -4 & 8 & -10 & 14 \\ \hline 2 & -4 & 5 & -7 & 9 \end{array} \quad \boxed{2x^3 - 4x^2 + 5x - 7 + \frac{9}{x+2}}$$

$$\textcircled{3} \quad 4 \begin{array}{r|rrrr} 3 & -4 & -5 & 2 \\ \downarrow & 12 & 32 & 108 \\ \hline 3 & 8 & 27 & 110 \end{array} \quad \boxed{3x^2 + 8x + 27 + \frac{110}{x-4}}$$

Parent graphs

- Draw the parent graphs for: $x^2, x^3, x^4, \sqrt{x}, |x|, \sqrt[3]{x}$



- Find Domain and Range for each graph

$$x^2 \quad D: (-\infty, \infty) \\ R: [0, \infty)$$

$$x^4 \quad D: (-\infty, \infty) \\ R: [0, \infty)$$

$$|x| \quad D: (-\infty, \infty) \\ R: [0, \infty)$$

$$x^3 \quad D: (-\infty, \infty) \\ R: (-\infty, \infty)$$

$$\sqrt{x} \quad D: [0, \infty) \\ R: [0, \infty)$$

$$\sqrt[3]{x} \quad D: (-\infty, \infty) \\ R: (-\infty, \infty)$$

Transformations- describe them

- 1.) $y = \sqrt{x-4} + 3$ RIGHT 4 , UP 3
- 2.) $y = -x^2 + 5$ Reflect x-axis , up 5
- 3.) $y = |x+4| - 7$ Left 4 , Down 7

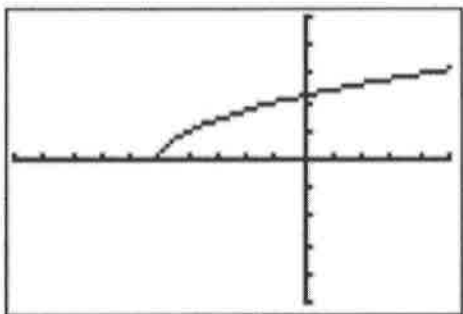
Transformations- write equation

- 1.) x^2 , up 2, left 5, reflect over **x**-axis $y = -(x+5)^2 + 2$
- 2.) absolute value, wider, right 2 $y = \frac{1}{2}|x-2|$
- 3.) square root, thinner, down 3

$$y = 2\sqrt{x} - 3$$

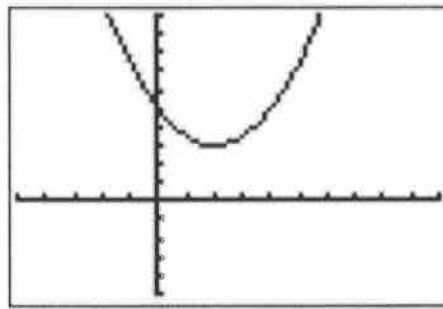
Transformations: find them from graph, then find the domain

Left 5 $D: [-5, \infty)$

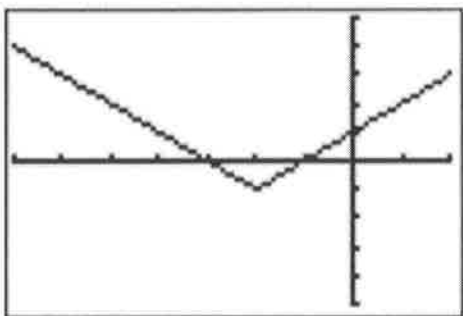


find the domain

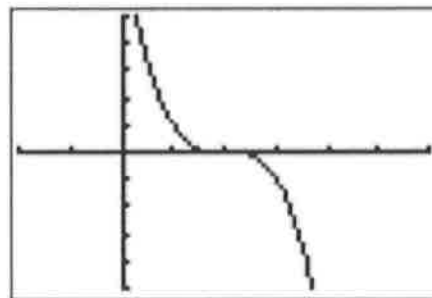
RIGHT 2
UP 3



$D: (-\infty, \infty)$



Left 2 $D: (-\infty, \infty)$
Down 1



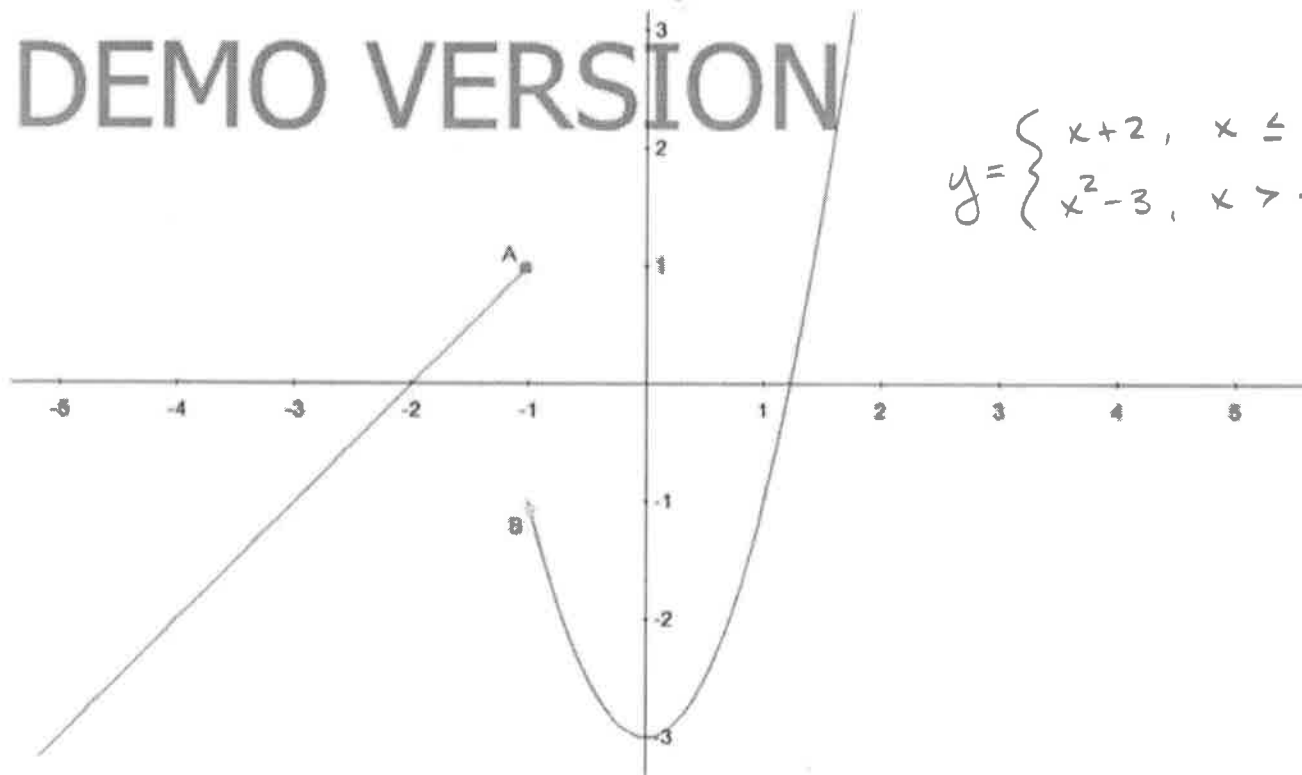
Reflect x-axis
Right 2

$D: (-\infty, \infty)$

Piecewise- find equation

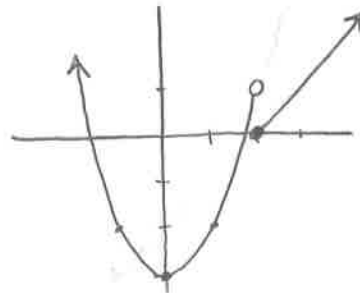
DEMO VERSION

$$y = \begin{cases} x+2, & x \leq -1 \\ x^2-3, & x > -1 \end{cases}$$

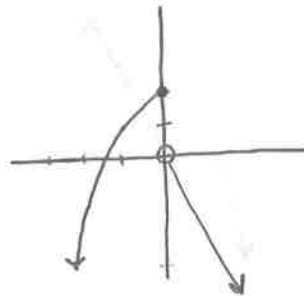


Piecewise: Graph

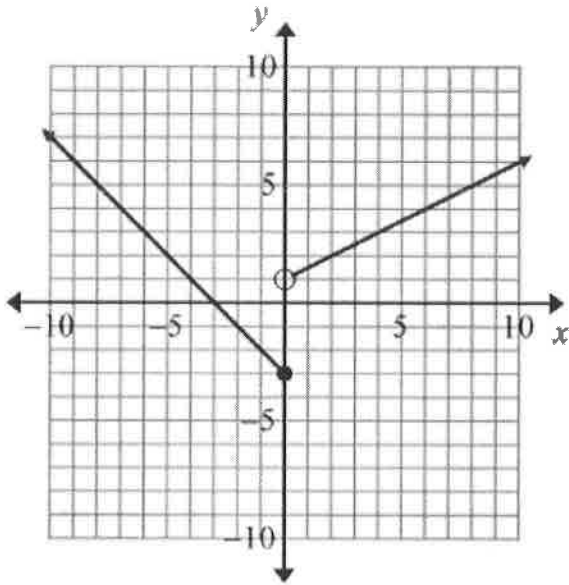
- 1.) $f(x) = \begin{cases} x - 2, & x \geq 2 \\ x^2 - 3, & x < 2 \end{cases}$



- 2.) $g(x) = \begin{cases} -3x, & x > 0 \\ -x^2 + 2, & x \leq 0 \end{cases}$



Which function is represented by the graph?



A. $f(x) = \begin{cases} -x-3, & \text{if } x \leq 0 \\ \frac{1}{2}x+1, & \text{if } x > 0 \end{cases}$

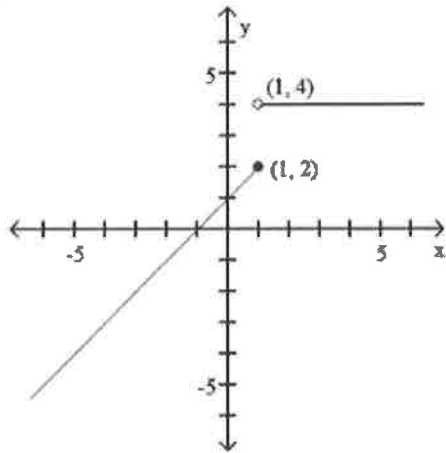
C. $f(x) = \begin{cases} -x+3, & \text{if } x \leq 0 \\ \frac{1}{2}x+1, & \text{if } x > 0 \end{cases}$

B. $f(x) = \begin{cases} x-3, & \text{if } x \leq 0 \\ -\frac{1}{2}x+1, & \text{if } x > 0 \end{cases}$

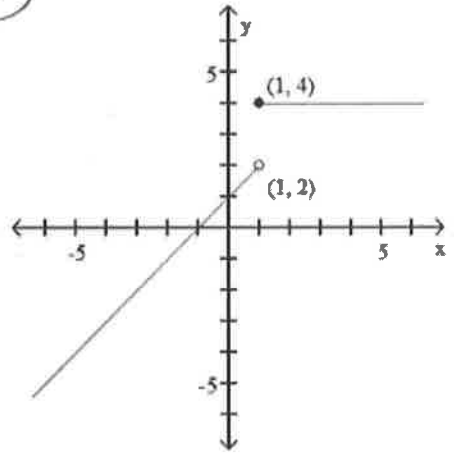
D. $f(x) = \begin{cases} x+3, & \text{if } x \leq 0 \\ -\frac{1}{2}x+1, & \text{if } x > 0 \end{cases}$

$$f(x) = \begin{cases} x + 1 & \text{if } x < 1 \\ 4 & \text{if } x \geq 1 \end{cases}$$

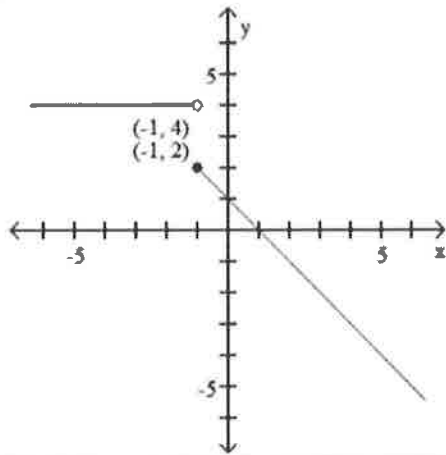
A)



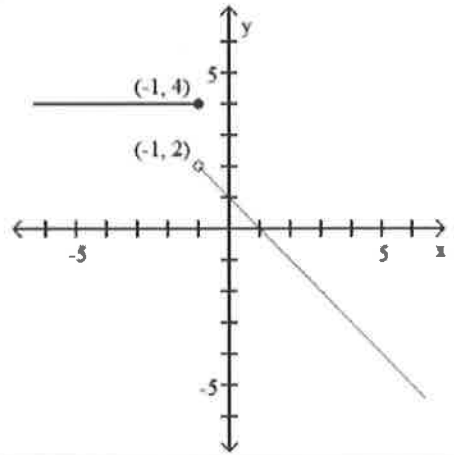
(B)



C)

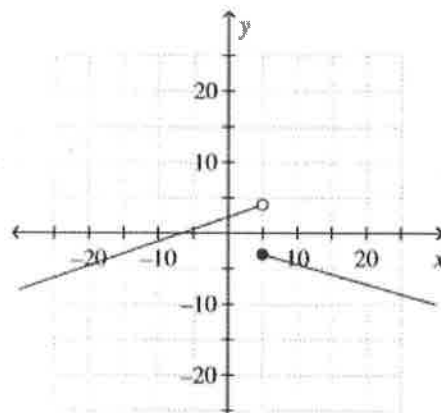


D)

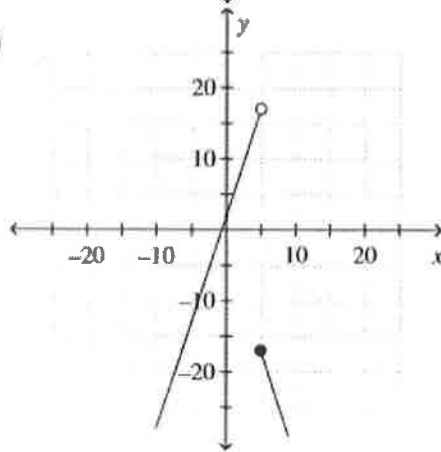


$$f(x) = \begin{cases} 3x + 2 & \text{if } x < 5 \\ -3x - 2 & \text{if } x \geq 5 \end{cases}$$

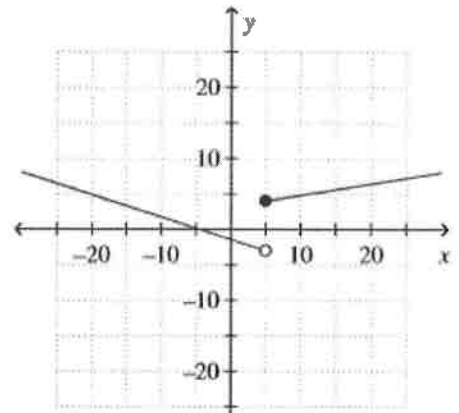
a.



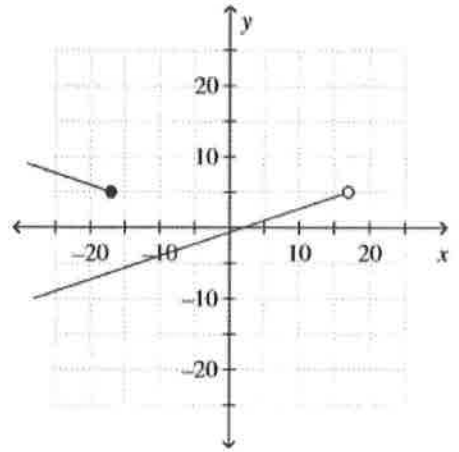
b.



c.



d.



Domain- equation

• 1.) $f(x) = \frac{2x-4}{x^2-7x+12}$ $D: (-\infty, 3) \cup (3, 4) \cup (4, \infty)$

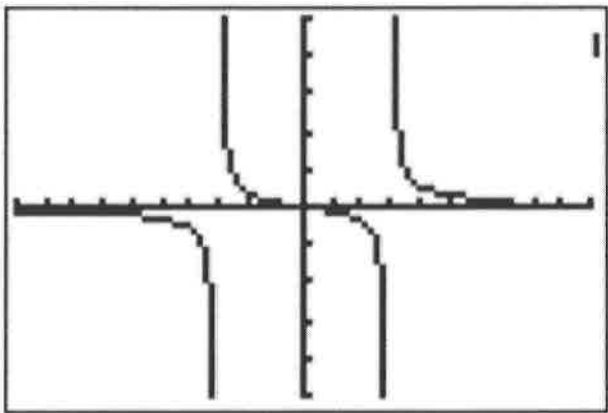
• 2.) $g(x) = \frac{x-5}{2x^2-x-15}$ $D: (-\infty, -5/2) \cup (-5/2, 3) \cup (3, \infty)$

• 3.) $h(x) = \frac{3x-1}{x^3-25x}$ $D: (-\infty, -5) \cup (-5, 0) \cup (0, 5) \cup (5, \infty)$

Asymptotes- equation-VA &HA

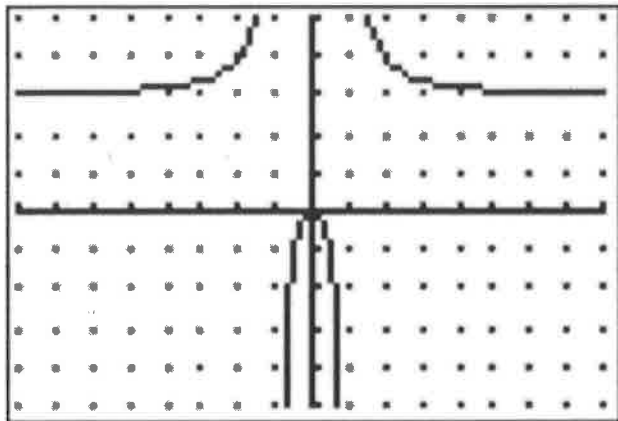
- 1.) $f(x) = \frac{x^3}{x^2 - x - 6}$ VA: $x = 3$ HA: none
 $x = -2$
- 2.) $g(x) = \frac{x+2}{6x^2 - 33x + 42}$ VA: $x = 2$ HA: $y = 0$
 $x = 7/2$
- 3.) $h(x) = \frac{3x^2}{x^2 - 4}$ VA: $x = 2$ HA: $y = 3$
 $x = -2$

Asymptotes- graph-VA &HA



$$\text{VA: } x = -3, x = 3$$

$$\text{HA: } y = 0$$



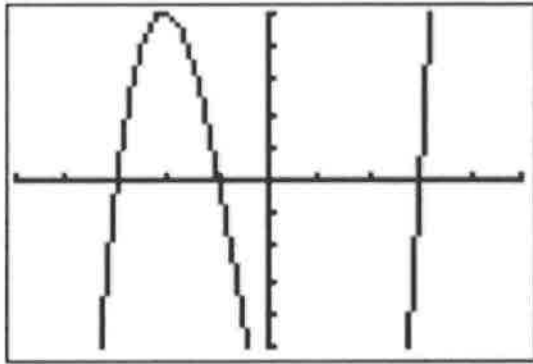
$$\text{VA: } x = -1, x = 1$$

$$\text{HA: } y = 3$$

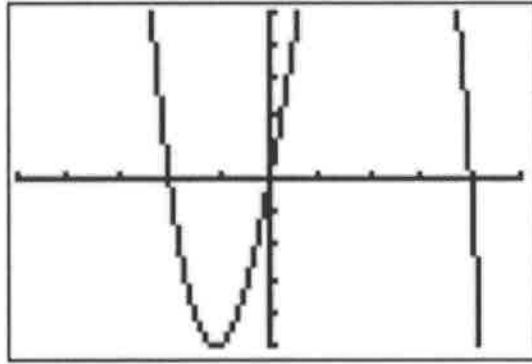
Roots-given roots- find equation, then graph

- 1.) roots of 3 and -5, $y = (x-3)(x+5) \rightarrow y = x^2 + 2x - 15$
- 2.) roots of 2, -2, 0 $y = x(x^2-4) \rightarrow y = x^3 - 4x$
- 3.) roots of 2, 2i, -2i $y = (x-2)(x^2+4) \rightarrow y = x^3 - 2x^2 + 4x - 8$

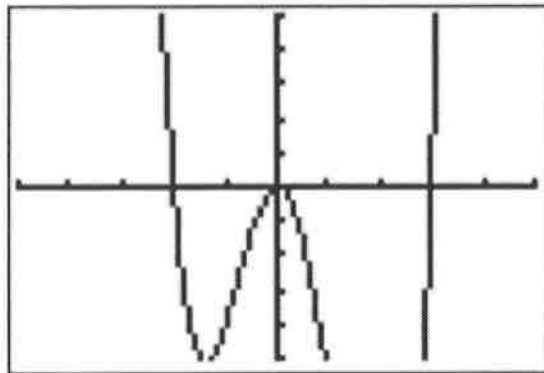
Roots- roots from graph



$$x = -3, -1, 3$$



$$x = -2, 0, 4$$



$$x = -2, 0 \text{ (D.R.)}, 3$$

Roots- Find roots from equation

- 1.) $f(x) = x^3 + 3x^2 - 4x - 12$ $x = -3, -2, 2$
- 2.) $g(x) = x^2 - 4x + 7$ $x = 2 \pm i\sqrt{3}$
- 3.) $h(x) = 4x^3 - 25x$ $x = 0, -\frac{5}{2}, \frac{5}{2}$

Factor: trinomials and grouping

- 1.) $y = x^2 - 121$ $(x+11)(x-11)$
- 2.) $y = 12x^2 - 8x - 15$ $(2x-3)(6x+5)$
- 3.) $y = x^3 - 4x + 5x^2 - 20$ $(x+5)(x+2)(x-2)$
- 4.) $y = x^3 + 5x - x^2 - 5$ $(x-1)(x^2+5)$

Quadratic formula:

$$x = \frac{-b \pm \sqrt{b^2 - 4ac}}{2a}$$

• 1.) $f(x) = x^2 - 6x + 4$ $3 \pm 2\sqrt{5}$

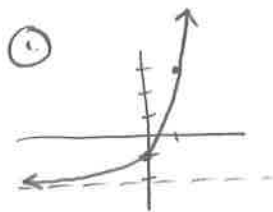
• 2.) $g(x) = 2x^2 + 4x - 3$ $\frac{-2 \pm \sqrt{13}}{2}$

• 3.) $h(x) = -3x^2 - 2x + 3$

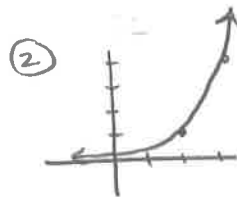
$$\frac{1 \pm \sqrt{10}}{-3}$$

Graph

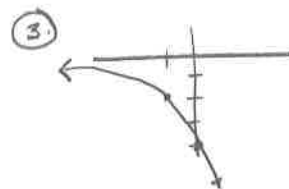
- 1.) $y = 5^x - 2$
- 2.) $y = 4^{x-2}$
- 3.) $y = -2^{x+2}$



HA: $y = -2$



HA: $y = 0$



HA: $y = 0$

Solve- log and ln

- 1.) $\log_3 4 = 1.262$
- 2.) $\log_7 12 = 1.277$
- 3.) $7^{-2x} = 14 \quad -.678$
- 4.) $11^{5x-2} = 25.75 \quad .671$
- 5.) $8e^{-5x} = 36 \quad -3.008$
- 6.) $34.3 = 13e^{-1.4x} \quad -.693$
- 7.) $\log_4(3x-4) = 2 \quad 20/3$
- 8.) $\log_2 x - \log_2 5 = 7 \quad 640$
- 9.) $2\log_3 x = 5 \quad 15.588$

Properties: expand

- 1.) $\log_4 x^2 y^3 \sqrt{z}$ $2 \log_4 x + 3 \log_4 y + \frac{1}{2} \log_4 z$

- 2.) $\ln \frac{x(y+5)}{z^4}$ $\ln x + \ln(y+5) - 4 \ln z$

- 3.) $\log \frac{x^2-4}{x}$ $\log(x+2) + \log(x-2) - \log x$

Properties: condense

• 1.) $\log(x-3) + \log(x+3) - \log x$ $\log \frac{x^2-9}{x}$

• 2.) $6 \log x - 7 \log y - 4 \log z$ $\log \frac{x^6}{y^7 z^4}$

• 3.) $\ln 3 + 3 \ln x - \frac{1}{2} \ln x$

$$\ln \frac{3x^3}{\sqrt{x}}$$

Word problems- interpret variables

Compounded $A = P\left(1 + \frac{r}{n}\right)^{nt}$

Continuous $A = Pe^{rt}$

Population $P(t) = Ce^{kt}$

Word Problems

- 1.) If \$3000 is invested at 3.5% interest compounded quarterly, what is the value after 10 years?

$$A = 3000 \left(1 + \frac{.035}{4} \right)^{4 \cdot 10} \quad \$ 4250.72$$

- 2.) If \$9500 is invested at 5% interest compounded daily, what is the value after 7 years?

$$A = 9500 \left(1 + \frac{.05}{365} \right)^{365 \cdot 7} \quad \$ 13,480.81$$

- 3.) Problem # 2 compounded continuously.

$$A = 9500 e^{.05(7)} \quad \$ 13,481.14$$

Word Problems (2)

- 4.) You invest \$2500 in an account that earns 7% interest compounded continuously. When will it double?

$$5000 = 2500 e^{.07 t} \quad 9.9 \text{ years}$$

- 5.) You invest \$4550 in an account that earns 4.5% interest compounded continuously. When will it be worth \$10,000?

$$10,000 = 4550 e^{.045 t} \quad 17.5 \text{ years}$$

- 6.) You invest \$1000 in an account that is compounded monthly. In 5 years it is worth \$1475. Find the rate.

$$1475 = 1000 \left(1 + \frac{r}{12}\right)^{12 \cdot 5}$$

$$1.475 = \left(1 + \frac{r}{12}\right)^{60}$$

$$1.475^{1/60} = 1 + \frac{r}{12}$$

$$\frac{1.475^{1/60} - 1}{12} = r$$

$$r = 7.8\%$$

Word Problems (3)

- 7.) The initial amount of bees is 50. They grow at a rate of 10% a day compounded continuously. Find the number of bees in 20 days. $A = 50 e^{.1(20)}$ 369 bees

- 8.) The initial amount of a mass of radium is 4.5 tons. It decays at a rate of -.5% compounded continuously. Find the amount of radium in 100 years.

$$A = 4.5 e^{-.005(100)} \quad 2.729 \text{ tons}$$

Convert

- To degrees:

- 1.) 3π 540°

- 2.) $\frac{4\pi}{5}$ 144°

- 3.) $\frac{-3\pi}{8}$ -67.5°

- To radians:

- 1.) 225° $\frac{5\pi}{4}$

- 2.) -300° $-\frac{5\pi}{3}$

- 3.) 280°
 $\frac{14\pi}{9}$

Evaluate

- 1.) $\sin 30^\circ = \frac{1}{2}$
- 2.) $\cos \frac{3\pi}{4} = -\frac{\sqrt{2}}{2}$
- 3.) $\tan 90^\circ$ UNDEF.
- 4.) $\sec(-150^\circ) = -\frac{2\sqrt{3}}{3}$
- 5.) $\csc \frac{\pi}{6} = 2$
- 6.) $\cot \pi$ UNDEF.

Given trig- find trig

- 1.) If $\sin\theta = \frac{3}{4}$ in quadrant II, find $\cot\theta$ $-\frac{\sqrt{7}}{3}$
- 2.) If $\cos\theta = -\frac{2}{7}$ in quadrant III, find $\sin\theta$ $\frac{3\sqrt{5}}{7}$
- 3.) If $\csc\theta = 3$ in quadrant I, find $\tan\theta$ $\frac{\sqrt{2}}{4}$

Graph- describe the graph

- 1.) $y = 3\cos\Theta - 2$ $a = 3$ $p = 2\pi$ down 2
 - 2.) $y = \cos(\Theta - 2)$ phase shift 2 $a = 1$ $p = 2\pi$
 - 3.) $y = 3\cos 2\Theta - 2$ $a = 3$ $p = \pi$ down 2
 - 4.) $y = 3\cos(2\Theta - 2)$ $a = 3$ $p = \pi$ phase shift 1
-
- 1.) $y = -2\sin(3\theta) + 4$ reflect, $a = 2$ $p = \frac{2\pi}{3}$, up 4
 - 2.) $y = 3\cos(\theta - \pi) - 5$ $a = 3$ $p = 2\pi$ phase shift π down 5
 - 3.) $y = -4\csc(\theta + \frac{\pi}{2})$ reflect $a = 4$ phase shift $-\frac{\pi}{2}$

Simplify

• 1.) $\sin^2 \theta \cos^2 \theta \sec \theta \tan \theta = \sin^3 \theta$

• 2.) $\frac{\sin^2 \theta}{1 + \cos \theta} = \cos \theta - 1$

• 3.) $\frac{\sin^2 \theta \cos \theta \cot^2 \theta}{\cos^3 \theta} = 1$

Solve

- 1.) $2\cos^2 x + \cos x = 0$ $\frac{\pi}{2}, \frac{3\pi}{2}, \frac{2\pi}{3}, \frac{4\pi}{3}$
- 2.) $2\cos^2 x - \cos x - 1 = 0$ $0, 2\pi, \frac{2\pi}{3}, \frac{4\pi}{3}$
- 3.) $\sin^2 x - 1 = 0$ $\frac{\pi}{2}, \frac{3\pi}{2}$
- 4.) $25\tan^2 x - 25 = 0$ $\frac{\pi}{4}, \frac{3\pi}{4}, \frac{5\pi}{4}, \frac{7\pi}{4}$

Law of Sines

- 1.) $m\angle A = 20^\circ, m\angle C = 100^\circ, c = 10, a = ?$ 3.47
- 2.) $m\angle A = 35^\circ, m\angle B = 75^\circ, a = 5.4, b = ?$ 9.09
- 3.) $m\angle A = 23^\circ, m\angle B = 34^\circ, a = 3.23, c = ?$ 2.26

Law of Cosines

- 1.) $a = 3, b = 5, c = 7, \text{ angle } A = ? \quad 21.79^\circ$
- 2.) $a = 4, b = 8, c = 11, \text{ angle } B = ? \quad 33.95^\circ$
- 3.) $a = 2, b = 7, c = 8, \text{ angle } B = ? \quad 53.58^\circ$