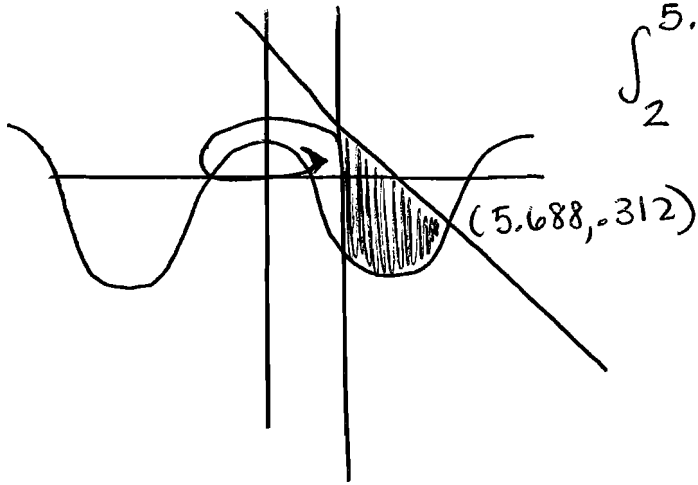


Find the volume generated when the region within the given boundaries is rotated about a specific line. Use the method of disks, washers, or shells to find the volume.

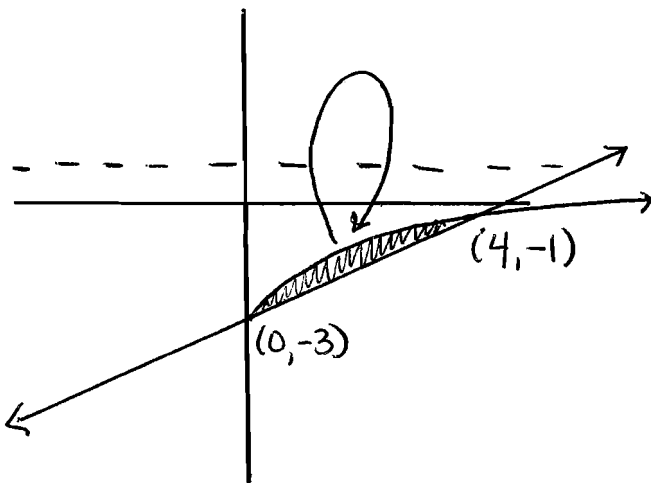
1)  $y = 4\cos(x) - 3$ ,  $y = -x + 6$ ,  $x = 2$  about y-axis



$$\int_2^{5.688} 2\pi x ((-x+6) - (4\cos x - 3)) dx$$

527.59

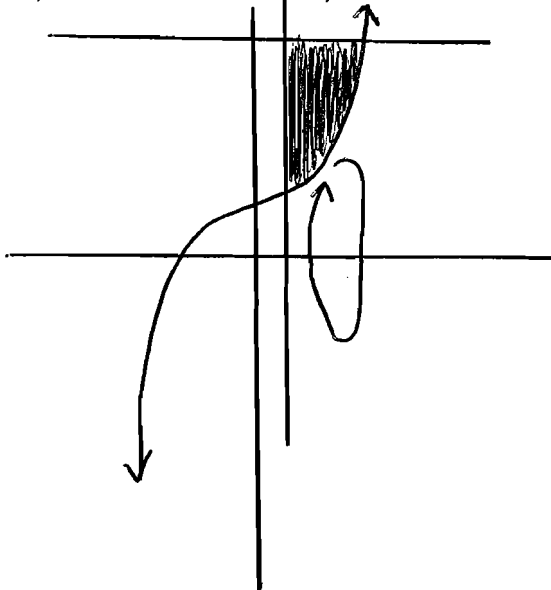
2)  $y = \sqrt{x} - 3$  and  $y = \frac{1}{2}x - 3$  about the line  $y = 1$



$$\int_0^4 \pi \left( (1 - (\frac{1}{2}x - 3))^2 - (1 - (\sqrt{x} - 3))^2 \right) dx$$

25.133

3)  $y = x^3 + 2$  and  $y = 5$  and  $x = .5$  about the x-axis

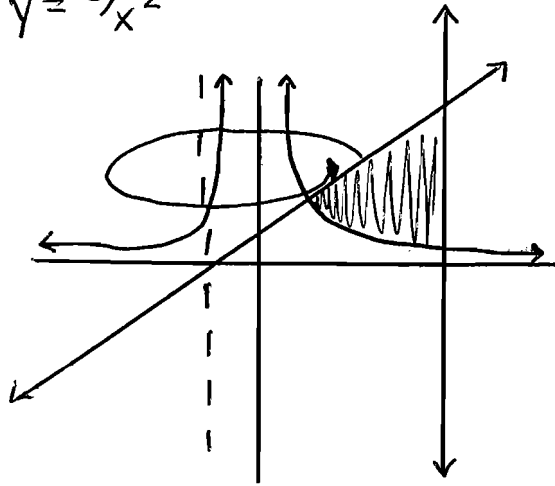


$$\int_{.5}^{1.442} \pi \left( (5)^2 - (x^3 + 2)^2 \right) dx$$

42.945

4)  $yx^2 = 5$  and  $y = \frac{1}{2}x + 2$  and  $x = 5$  about the line  $x = -2$

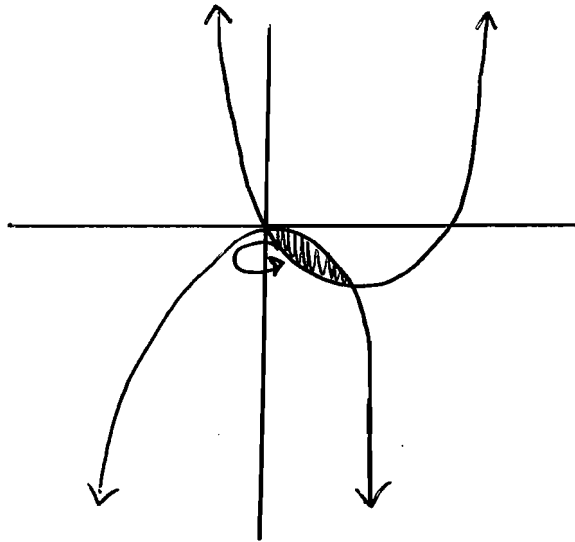
$$y = \frac{5}{x^2}$$



$$\int_{1.365}^5 2\pi (x - (-2)) \left( \left( \frac{1}{2}x + 2 \right) - \left( \frac{5}{x^2} \right) \right) dx$$

363.402

5)  $y = x^2 - 5x$  and  $y = -2x^2$  about y-axis

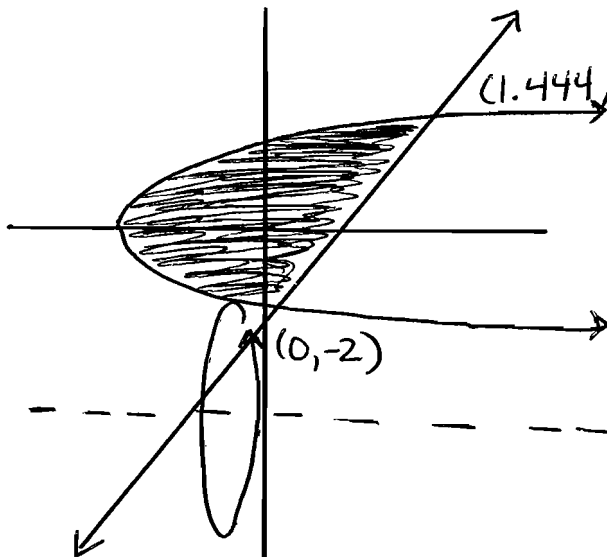


$$\int_0^{1.667} 2\pi x \left( (-2x^2) - (x^2 - 5x) \right) dx$$

12.12

Note:  
if you try to do this as  
a right left you cannot  
solve for  $x$  in the 1<sup>st</sup> eqn

6)  $y = 3x - 2$  and  $y^2 = x + 4$  about the line  $y = -4$



$$\int_{-2}^{2.333} 2\pi (y - (-4)) \left( \left( \frac{1}{3}y + \frac{2}{3} \right) - (y^2 - 4) \right) dy$$

355.045