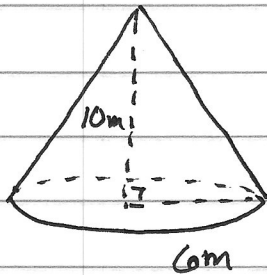


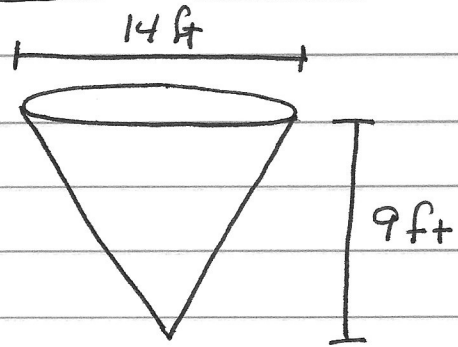
Volume of Cones

Calculate the volume. Round to the nearest tenth.

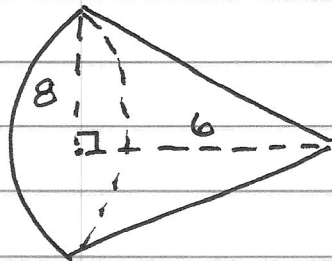
①



②



③



④ the height of a cone is 16 miles & the diameter of the base is 12 miles.

Answers

① 376.8 m^3

② 461.6 ft^3

③ 401.9 units^3

④ 602.9 mi^3