




Telling Time


What time is it now?

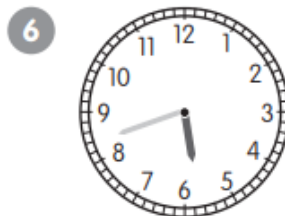


















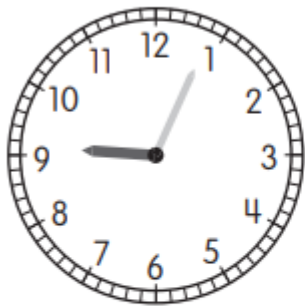
For each problem, decide if it is A.M. or P.M.
Draw a ring around your answer.

The clock shows 6:00. You are eating dinner. A.M. P.M.

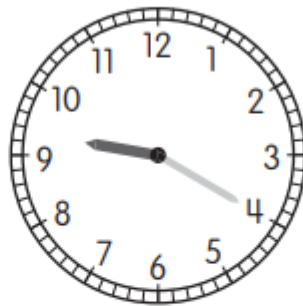
The clock shows 10:00. You are at school. A.M. P.M.

The clock shows 12:00. You are eating lunch. A.M. P.M.

Look at the two clocks.



Clock A



Clock B

Ashley says that Clock A shows the time 9:04, while Blake says that Clock B shows the time 9:04. Who is correct? Explain the mistake one of them could have made.
